

**Q1.**Plants transport water and mineral ions from the roots to the leaves.

(a) Plants move mineral ions:

- from a low concentration in the soil
- to a high concentration in the root cells.

What process do plants use to move these minerals ions into root cells?

Tick **one** box.

Active transport	<input type="checkbox"/>
Diffusion	<input type="checkbox"/>
Evaporation	<input type="checkbox"/>
Osmosis	<input type="checkbox"/>

(1)

(b) Describe how water moves from roots to the leaves.

.....

.....

.....

.....

(2)

(c) Plants lose water through the stomata in the leaves.

The epidermis can be peeled from a leaf.

The stomata can be seen using a light microscope.

The table below shows the data a student collected from five areas on one leaf.

Leaf area	Number of stomata	
	Upper surface	Lower surface

1	3	44
2	0	41
3	1	40
4	5	42
5	1	39
<b>Mean</b>	<b>2</b>	<b>X</b>

Describe how the student might have collected the data.

.....

.....

.....

.....

.....

.....

.....

.....

(3)

(d) What is the median number of stomata on the upper surface of the leaf?

.....

(1)

(e) Calculate the value of **X** in the table.

Give your answer to 2 significant figures.

.....

.....

Mean number of stomata on lower surface of leaf = .....

(2)

- (f) The plant used in this investigation has very few stomata on the upper surface of the leaf.

Explain why this is an **advantage** to the plant.

.....


.....

.....

.....

(2)  
(Total 11 marks)

**Q2.**The image below shows some cells on the lower surface of a leaf.



© Stefan Diller/Science Photo Library

(a) What are the cells labelled **X** called?

Draw a ring around the correct answer.

**guard cells**

**palisade cells**

**mesophyll cells**

(1)

(b) Water loss by evaporation from leaves is called **transpiration**.

A student set up an experiment to investigate water loss from leaves.

The student:

- took two leaves, **A** and **B**, from a plant
- put Vaseline (grease) on both sides of **Leaf B**; did nothing to **Leaf A**

- wrote down the mass of each leaf
- attached the leaves onto a string as shown in the diagram below.



**Leaf A**  
(no treatment)

**Leaf B**  
(both surfaces  
covered in Vaseline)

- left the leaves for 48 hours
- wrote down the mass of each leaf again
- calculated the percentage (%) change in mass for each leaf.

(i) Give **one** variable that the student controlled in this investigation.

.....  
.....

(1)

(ii) The mass of **Leaf A** was 1.60 g at the start of the investigation. After 48 hours it was 1.28 g.

Calculate the % decrease in mass over 48 hours.

.....  
.....

% decrease = .....

(2)

(c) Vaseline blocks the stomata.

The % change in mass of **Leaf B** was less than **Leaf A** after 48 hours.  
Explain why.

.....  
.....  
.....

(1)

(d) Give **three** environmental conditions that would increase transpiration.

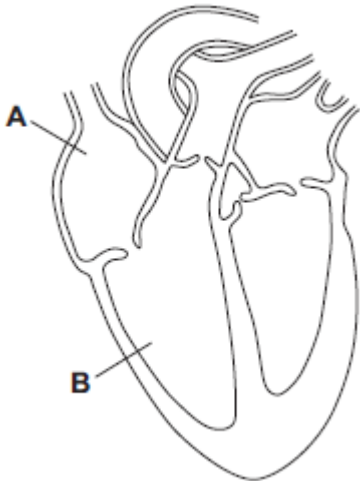
1 .....  
2 .....  
3 .....

(3)

(Total 8 marks)

Q3. Diagram 1 shows a section through the heart.

Diagram 1



(a) Use words from the box to name the structures labelled **A** and **B** on **Diagram 1**.

arota	atrium	pulmonary artery	ventricle
-------	--------	------------------	-----------

**A** .....

**B** .....

(2)

(b) The tissue in the wall of the heart contracts.

(i) What type of tissue is this?

Tick (✓) **one** box.

muscular

glandular

epithelial



(1)

(ii) What does the heart do when this tissue contracts?

.....  
.....

(1)

(c) Draw arrows on **Diagram 2** to complete the route taken by deoxygenated blood through the heart.

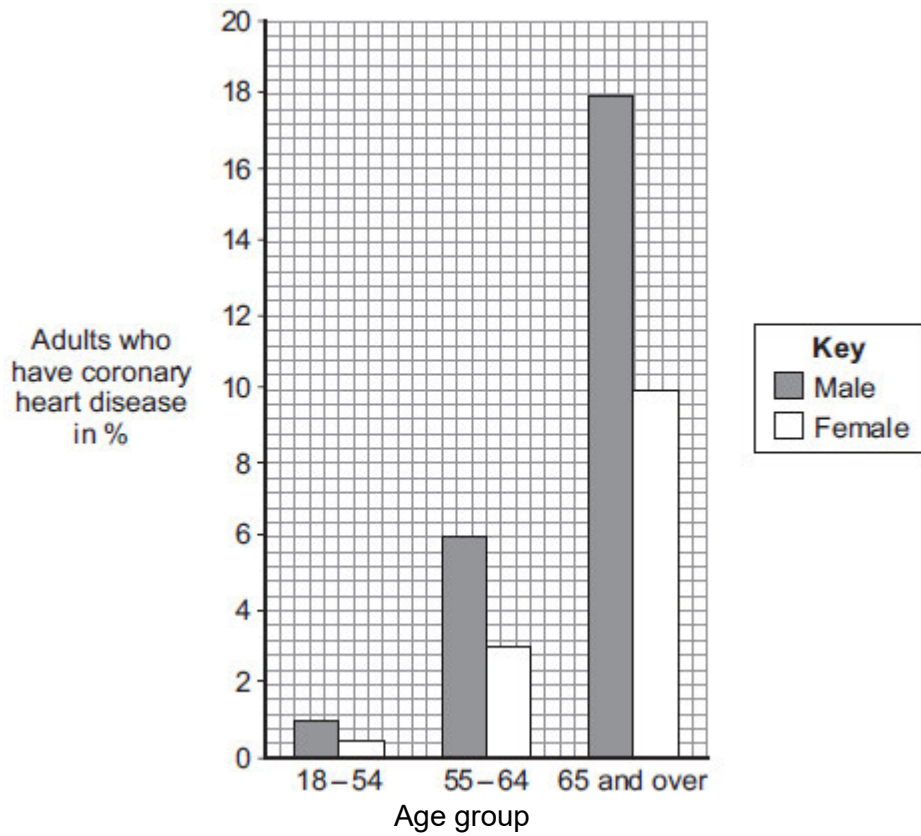
**Diagram 2**



(2)

(d) The graph shows the percentage (%) of adults in the UK who have coronary heart disease.





(i) Look at the graph.

Which group of people is **most** at risk of having coronary heart disease in the UK?

.....

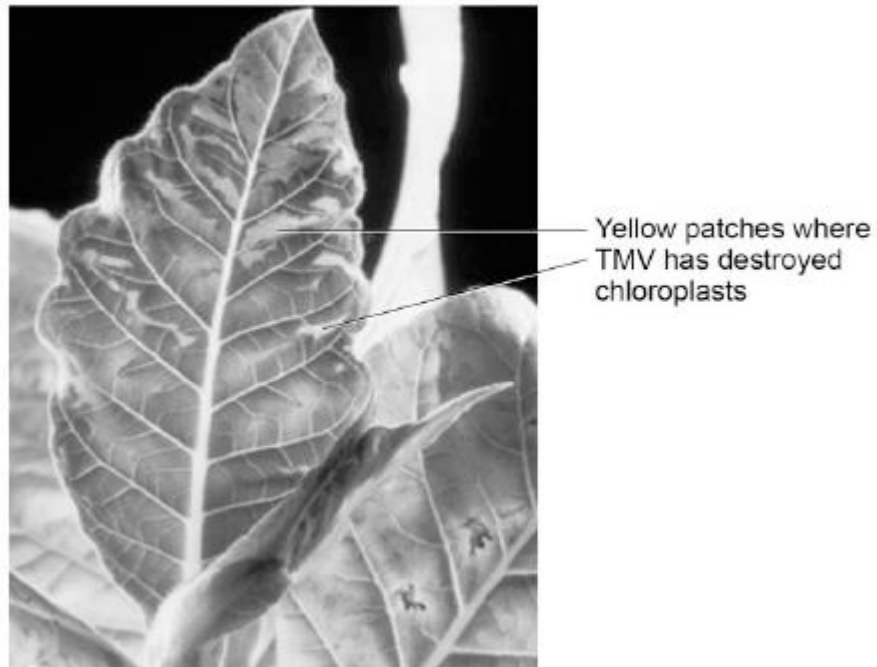
(2)

(ii) Explain what happens to the heart in coronary heart disease.

.....  
 .....  
 .....  
 .....  
 .....  
 .....

**Q4.** Tobacco mosaic virus (TMV) is a disease affecting plants.

The diagram below shows a leaf infected with TMV.



© Nigel Cattlin/Visuals Unlimited/Getty Images

- (a) All tools should be washed in disinfectant after using them on plants infected with TMV.

Suggest why.

.....  
.....

(1)

- (b) Scientists produced a single plant that contained a TMV-resistant gene.

Suggest how scientists can use this plant to produce **many** plants with the TMV-resistant gene.

.....  
.....

(1)

(c) Some plants produce fruits which contain glucose.

Describe how you would test for the presence of glucose in fruit.

.....  
.....  
.....  
.....

**(2)**

(d) TMV can cause plants to produce less chlorophyll.

This causes leaf discoloration.

Explain why plants with TMV have stunted growth.

.....  
.....  
.....  
.....  
.....  
.....  
.....  
.....  
.....  
.....  
.....  
.....  
.....

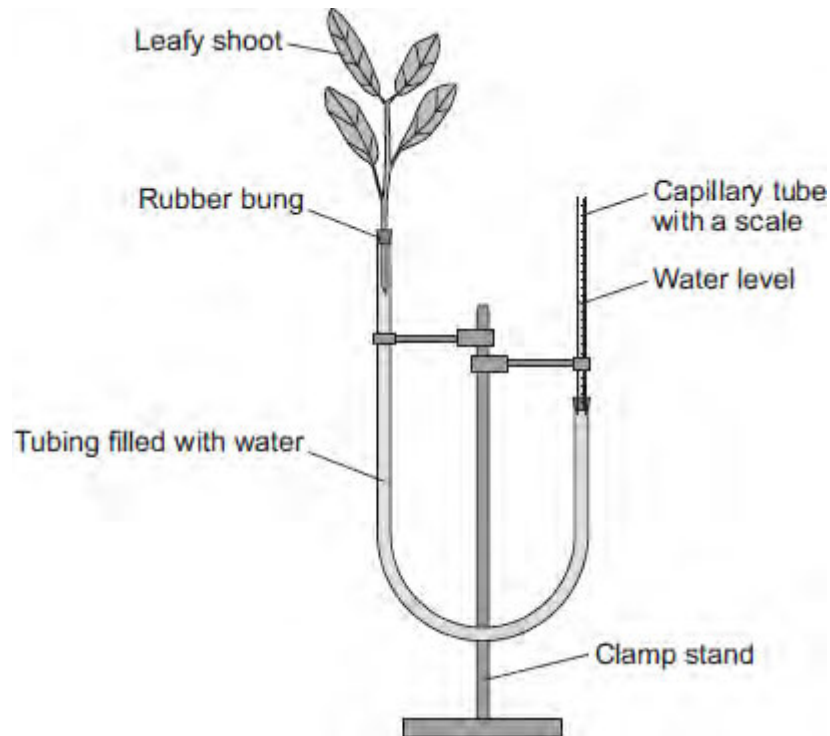
**(4)**

**(Total 8 marks)**

**Q5.**A potometer is a piece of apparatus that can be used to measure water uptake by a leafy shoot.

**Figure 1** shows a potometer.

**Figure 1**



Some students used a potometer like the one shown in **Figure 1**.

- They measured the water taken up by a shoot in normal conditions in a classroom.
- As the water was taken up by the shoot, the level of water in the capillary tube went down.
- The students recorded the level of the water in the capillary tube at 2-minute intervals for 10 minutes.

**Table 1** shows the students' results.

**Table 1**

Time in minutes	0	2	4	6	8	10
Level of water (on scale) in capillary tube in mm	2.5	3.6	4.4	5.4	6.5	7.5

The area of the cross section of the capillary tube was 0.8 mm<sup>2</sup>.

- (a) (i) Complete the following calculation to find the volume of water taken up by the shoot in mm<sup>3</sup> per minute.

Distance water moved along the scale in 10 minutes = .....mm

Volume of water taken up by the shoot in 10 minutes = .....mm<sup>3</sup>

Therefore, volume of water taken up by the shoot in 1 minute = .....mm<sup>3</sup>

(3)

- (ii) The students repeated the investigation but this time placed the potometer next to a fan blowing air over the leafy shoot.

Suggest how the results would be different. Give a reason for your answer.

.....  
.....  
.....  
.....

(2)

- (b) The students repeated the investigation at different temperatures.

The results are shown in **Table 2**.


**Table 2**

Temperature in °C	Rate of water uptake in mm <sup>3</sup> per minute
10	0
15	0.4
20	1.0
25	2.1
30	3.2
35	4.0
40	4.4

Plot the data from **Table 2** on the graph paper in **Figure 2**.

Choose suitable scales, label both axes and draw a line of best fit.

**Figure 2**



(5)

- (c) What would happen to the leaves if the potometer was left for a longer time at 40 °C?

Explain your answer.

.....

.....

.....

.....

.....

.....

(3)

(Total 13 marks)